

Year R ORANGE group Maths w.b. 6.7.20: Adding together 3 single-digit numbers/ recalling doubles

This week we are adding together 3 single-digit numbers and revisiting our recall of doubles.

**Monday**

Please watch these episodes of Numberblocks:

Revising addition - <https://www.bbc.co.uk/iplayer/episode/b08r3xqq/numberblocks-series-2-numberblock-castle>

Revising doubles - <https://www.bbc.co.uk/iplayer/episode/b08q4jkg/numberblocks-series-2-double-trouble>

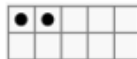

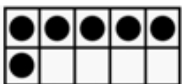
**Tuesday**

Today is your child's Maths session on Zoom with Miss Cooke. Please have a whiteboard and pen or paper and a pencil/felt pen ready. <https://us04web.zoom.us/j/5644424913?pwd=0vBAEIVCzVR-jzE64v4SXIfgoZkdvan-cg> Meeting ID: 564 442 4913 Password: glenfield




Wednesday - adding 3 single-digit numbers together using different representations



	+		+		=	
--	---	--	---	--	---	--



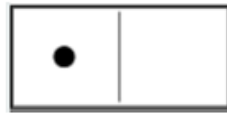
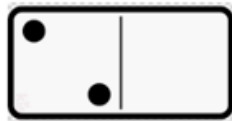
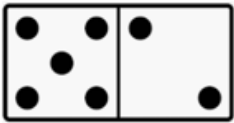
	+		+		=	
--	---	--	---	--	---	--



	+		+		=	
--	---	--	---	--	---	--



	+		+		=	
--	---	--	---	--	---	--



	+		+		=	
--	---	--	---	--	---	--

**Thursday - adding 3-single digit numbers together using jottings**

You will need a dice for this activity. You can access a virtual dice here: <https://www.online-stopwatch.com/chance-games/roll-a-dice/>

Roll the dice three times to generate 3 numbers and write one number in each of the shaded boxes. Then in the box directly underneath, draw the jottings to go with the number. Encourage your child to count on by starting with the biggest number so 6 + 4 would be 6, 7, 8, 9, 10 and then 11,12,13.

6	+	4	+	3	=	13


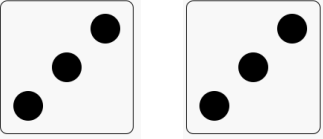





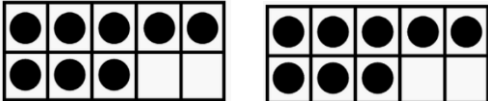
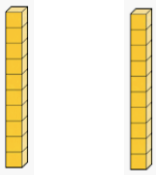
Now have a go at your own:







Friday - recalling doubles to 10 and solving problems using doubles

Representation	Number sentence
	
	
	$4 + 4 =$
	
	
	
	
	
	

Problem

Number sentence


Yesterday Jane made 5 cupcakes. She made double the amount today. **How many cupcakes did Jane make today?**



Darren had 6 ants yesterday but today, he has double the amount. **How many ants does Darren have today?**



In the morning Susie made 2 cakes. In the afternoon she made double this. **How many cakes did she make in the afternoon?**



A triangle has 3 sides. **How many sides do 2 triangles have?**

