


- 1** Sam has £50
He buys this cap and jumper with his money.



How much money does he have left?

- 2** One half of a number is 6
What is double the number?

3



Mo gives Alex some stickers.
They now have the same number of stickers.

How many stickers does Mo give Alex?

1 Which of these are equal to 15?

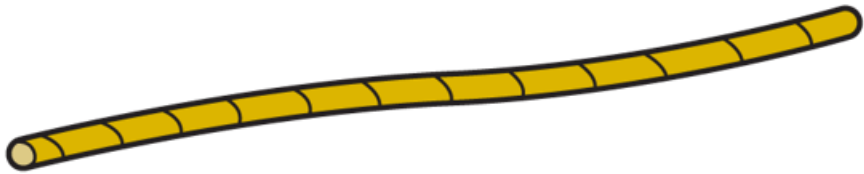
$$10 + 5$$

$$5 + 5 + 5$$

$$20 - 5$$

$$1 + 5$$

2 A rope measures 30 metres.



The rope is cut into 10 equal sized pieces.

What is the total length of 5 of these pieces?

3 Danny has two boxes of sweets.



He puts the sweets into smaller bags.

There are 5 in
each bag.




How many bags can Danny fill using all the sweets?

1 In a box

- $\frac{1}{4}$ of the apples are green.
- The rest are red.
- There are 5 green apples.

How many apples are red?



2 Amir has 10 cartons of juice.



Each carton holds 2 litres of juice.

How much juice is in 7 cartons?

1 Here are 3 number patterns.

0	5	10	15	20		30
---	---	----	----	----	--	----

27	37		57	67	77	87
----	----	--	----	----	----	----

32	30	28	26		22	20
----	----	----	----	--	----	----

What is the sum of the three missing numbers?

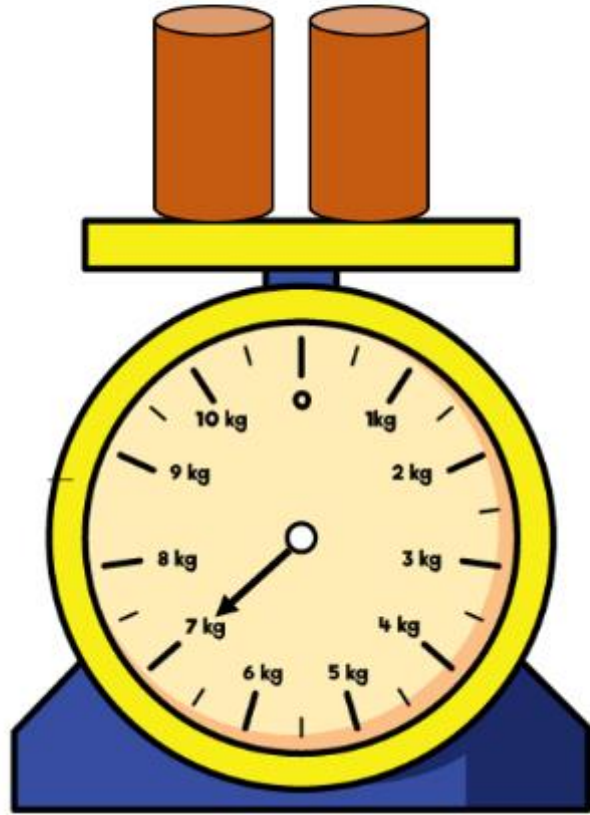
2 Work out the value of each symbol.

$$\triangle + \triangle = 18$$

$$\triangle + \diamond = 30$$

$$\star - \diamond = 10$$

- 1** Mary measures the mass of 2 cylinders.



What is the mass of 10 of these cylinders?

- 2** Jack and Dora each have some money.



I spent half of my money.

I spent £12



They have the same amount left.

Dora spent £20

How much money did Jack have at the start?