


Year 1 Problem of the Day

How many strawberries are here?



Write the number that is one more.

4 →

6 →

10 →

Year 1 Problem of the Day

Write the numbers in the box.

three

nine

one

Write a number statement for the picture.

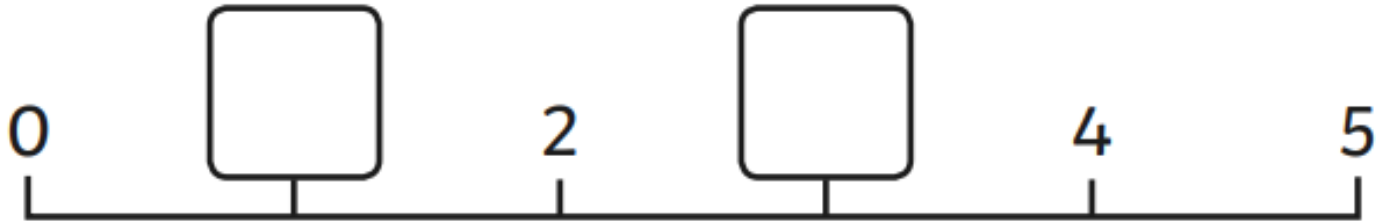


+

=

Year 1 Problem of the Day

Put the missing numbers on the number line.




$7-1=$

$5-1=$

$2-1=$

Year 1 Problem of the Day

Tessa has 6 pens. She loses 1 pen.
How many pens does she have left?



What's next? Write 3 more numbers in this sequence.



Year 1 Problem of the Day

Double these numbers.

$2 \rightarrow \boxed{}$

$3 \rightarrow \boxed{}$

Add the coins.

