

# Year 1 Problem of the Day

I have 3 pairs of shoes.

How many shoes is that altogether?



Shep had 3 dog biscuits.

Rover had 5. How many more biscuits did Rover have?



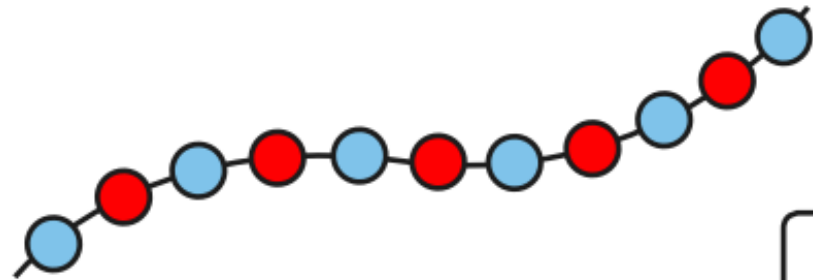
# Year 1 Problem of the Day

I lose 5p from the money pictured below.

How much money have I got left?




Count the beads and write the number.

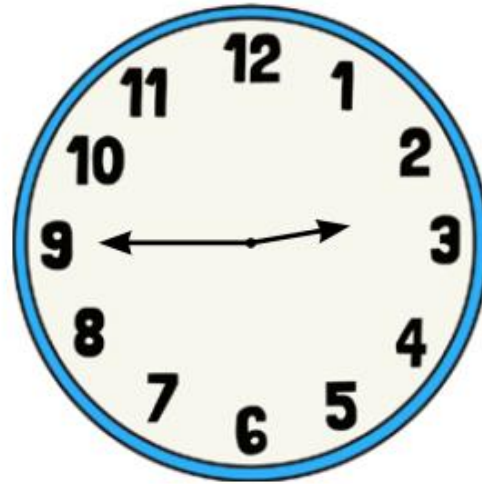


# Year 1 Problem of the Day

Cut the cake into quarters.



What time is it?



3 o'clock

quarter past 7

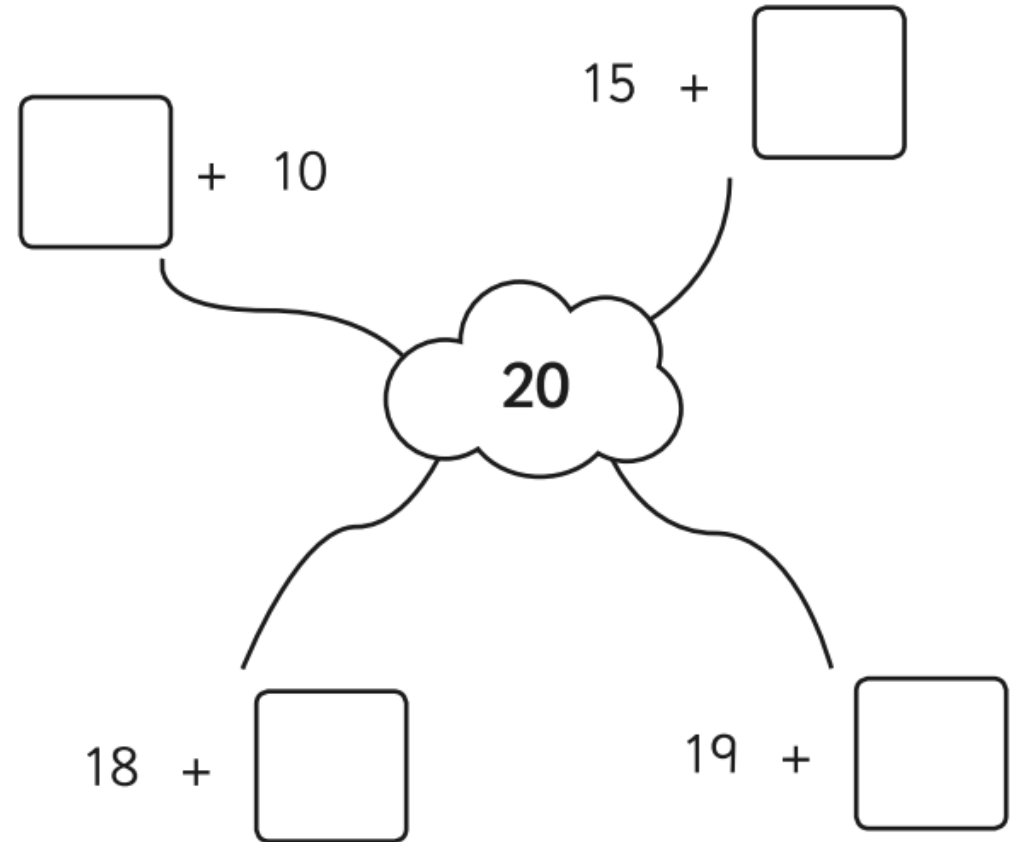
quarter to 3

# Year 1 Problem of the Day

What numbers are missing?

10	8	6			0
----	---	---	--	--	---

Complete the number pairs:



# Year 1 Problem of the Day

Match the numbers with their names:

26            eighteen

15            thirty-one

31            twenty-six

18            fifteen

30 → 10 less →

55 → 10 less →

83 → 10 less →

32 → 10 less →