

Year 2 Home learning, Spring 1 Week 3



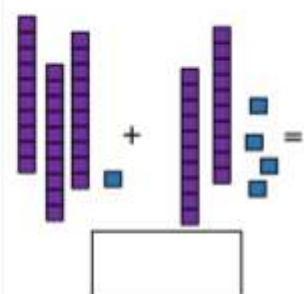
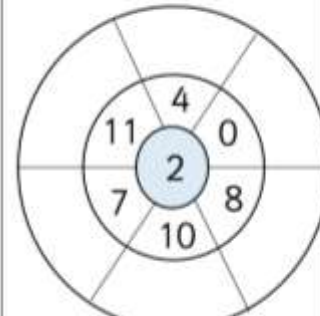
week starting 18th January 2021

Daily extras...

For the maths and the SPAG questions, select the questions you are confident to tackle, as there are challenge questions or make it simpler questions...


😊 Maths, 'Problems of the Day'

☆ Challenges...Tackle 2 questions each day:

<p style="text-align: center;">Count in steps of 5</p> <table style="margin-left: auto; margin-right: auto;"> <tr><td style="border: 1px solid black; padding: 5px;">0</td></tr> <tr><td style="border: 1px solid black; padding: 5px;"> </td></tr> <tr><td style="border: 1px solid black; padding: 5px;">10</td></tr> </table> <p style="text-align: center;">Count in steps of 3</p> <table style="margin-left: auto; margin-right: auto;"> <tr> <td style="border: 1px solid black; padding: 5px;">12</td> <td style="border: 1px solid black; padding: 5px;"> </td> <td style="border: 1px solid black; padding: 5px;"> </td> </tr> </table>	0		10	12			<p style="text-align: center;">What time is it?</p> <div style="text-align: center;">  </div> <div style="border: 1px solid black; width: 100px; height: 20px; margin: 10px auto;"></div>	<p style="text-align: center;">Write the 2 missing numbers in this pattern.</p> <div style="text-align: center;">  </div>	<p style="text-align: center;">True or False?</p> <p style="text-align: center;">The number sentences below will give me the same answers.</p> <p style="text-align: center;">$8 + 3 =$</p> <p style="text-align: center;">$3 + 8 =$</p> <div style="border: 1px solid black; width: 100px; height: 20px; margin: 10px auto;"></div>																																																																																																					
0																																																																																																														
10																																																																																																														
12																																																																																																														
<p>Draw an array for $2 \times 6 =$ </p> <table border="1" style="width: 100%; height: 100%; border-collapse: collapse;"> <tr><td> </td><td> </td><td> </td><td> </td><td> </td><td> </td><td> </td><td> </td></tr> <tr><td> </td><td> </td><td> </td><td> </td><td> </td><td> </td><td> </td><td> </td></tr> <tr><td> </td><td> </td><td> </td><td> </td><td> </td><td> </td><td> </td><td> </td></tr> <tr><td> </td><td> </td><td> </td><td> </td><td> </td><td> </td><td> </td><td> </td></tr> <tr><td> </td><td> </td><td> </td><td> </td><td> </td><td> </td><td> </td><td> </td></tr> <tr><td> </td><td> </td><td> </td><td> </td><td> </td><td> </td><td> </td><td> </td></tr> </table>																																																	<p>$59 + 12 =$ </p> <table border="1" style="width: 100%; height: 100%; border-collapse: collapse;"> <tr><td> </td><td> </td><td> </td><td> </td><td> </td><td> </td><td> </td><td> </td></tr> <tr><td> </td><td> </td><td> </td><td> </td><td> </td><td> </td><td> </td><td> </td></tr> <tr><td> </td><td> </td><td> </td><td> </td><td> </td><td> </td><td> </td><td> </td></tr> <tr><td> </td><td> </td><td> </td><td> </td><td> </td><td> </td><td> </td><td> </td></tr> <tr><td> </td><td> </td><td> </td><td> </td><td> </td><td> </td><td> </td><td> </td></tr> <tr><td> </td><td> </td><td> </td><td> </td><td> </td><td> </td><td> </td><td> </td></tr> </table>																																																	<p style="text-align: center;">How many books Ola read in the summer holidays? -2</p> <table border="1" style="width: 100%; border-collapse: collapse;"> <tbody> <tr><td style="text-align: center;">Week 1</td><td style="text-align: center;"></td></tr> <tr><td style="text-align: center;">Week 2</td><td style="text-align: center;"></td></tr> <tr><td style="text-align: center;">Week 3</td><td style="text-align: center;"></td></tr> <tr><td style="text-align: center;">Week 4</td><td style="text-align: center;"></td></tr> <tr><td style="text-align: center;">Week 5</td><td style="text-align: center;"></td></tr> <tr><td style="text-align: center;">Week 6</td><td style="text-align: center;"></td></tr> </tbody> </table> <p style="text-align: center;">How many books did Ola read in week 4?</p> <div style="border: 1px solid black; width: 100px; height: 20px; margin: 10px auto;"></div>	Week 1		Week 2		Week 3		Week 4		Week 5		Week 6	
Week 1																																																																																																														
Week 2																																																																																																														
Week 3																																																																																																														
Week 4																																																																																																														
Week 5																																																																																																														
Week 6																																																																																																														
<p style="text-align: center;">Write the answer in the box.</p> <p>$54 + 10 =$ </p> <p>$87 - 10 =$ </p> <p>$34 - 10 =$ </p> <p>$90 + 10 =$ </p>	<p style="text-align: center;">What is the answer?</p> <div style="text-align: center;">  </div> <div style="border: 1px solid black; width: 100px; height: 20px; margin: 10px auto;"></div>	<p style="text-align: center;">Fill in the multiplication circle.</p> <div style="text-align: center;">  </div>	<p style="text-align: center;">Write the correct number to make the number sentence true.</p> <p style="text-align: center;">40 + 10 = </p> <p style="text-align: center;">50 + = 60</p> <p style="text-align: center;">40 - 40 = </p>																																																																																																											


😊 Make it simpler: Tackle 1 question each day:

Can you **estimate** how many bees there are?




Count and check.

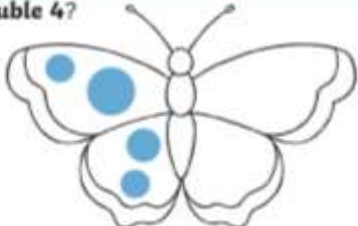
Can you work out the answer?

$$4 + 3 = \square$$


How many spots does each ladybird have?



What is **double 4**?



7 pigs get on the bus.

1 pig gets off the bus.

How many pigs are on the bus?

😊 Music - have a sing along:

You're all superstars at the moment, staying home, sating safe and working hard.

Join in and sing 'A sky full of stars' with the Kidz Bop team https://www.youtube.com/watch?v=UimlYAius_o

A song about the planets in our solar system: <https://www.youtube.com/watch?v=zKuAGmgWzHk>

Because you can, 'Just sing' https://www.youtube.com/watch?v=ut5_ZaEAS3s

Your challenge this week is to join the Singing Hands ladies,

and sing and sign along to 'A sky full of Stars'

<https://www.youtube.com/watch?v=95rLAQDCbAU>



😊 Keeping active:

Get your 'Gangnam Style' on and get moving <https://www.youtube.com/watch?v=9fgA6TJ5VHY>



Are you an All star? <https://youtu.be/JU-oHSxhoCc?t=8>



Jamie is heading off on another Cosmic Yoga adventure, with a Robodog https://youtu.be/iS_B6Jhlpqg?t=13



It's a x2 x10 x5 table mashup with the BBC supermovers <https://www.bbc.co.uk/teach/supermovers/ks1-maths-the-times-tables-mash-up-with-monty-maggie-billy-the-badger/znxcpg8>



ACE sports (the company Jack, our sports coach works for) has uploaded a selection of keeping active activities on their YouTube channel – take a look and get active!

https://youtube.com/channel/UCdf+YrJg-wuLh_INH5HOMLQ



😊 Reading:

Keep reading, use the online library, as well as the 'matched' reading you were linked to on Marvellous Me <https://www.storylineonline.net/>



😊 Spelling:

The new spelling rule for this week has been added to www.spellingframe.co.uk with lots of games and activities to help you child learn the words. If you need reminding of you log-on, then Hi-5 the spelling activity message and we will send you the information you need.

Perfect your punctuation



- For each sentence, decide if you will use a ! ? or . to complete it

What time is it	My name is Fred
I baked some cupcakes and then ate them all	We drove to London in a coach

Conjunction please



- Which conjunction will you use to complete each sentence?

My favourite colours are orange _____ green.	Tia likes chocolate ice-cream _____ not chocolate biscuits.	Would you like some carrots _____ peas?
Tick one	Tick one	Tick one
but <input type="checkbox"/>	if <input type="checkbox"/>	because <input type="checkbox"/>
if <input type="checkbox"/>	and <input type="checkbox"/>	when <input type="checkbox"/>
and <input type="checkbox"/>	but <input type="checkbox"/>	if <input type="checkbox"/>
or <input type="checkbox"/>	or <input type="checkbox"/>	or <input type="checkbox"/>

Commas, commas everywhere

- Where does the one comma need to go in each sentence?

Ria likes chocolates sweets and crisps.	You can be mean horrible and unkind!
<input type="checkbox"/> <input type="checkbox"/> <input type="checkbox"/> <input type="checkbox"/>	<input type="checkbox"/> <input type="checkbox"/> <input type="checkbox"/> <input type="checkbox"/>



Holding Hands



• Match the words which have the same meaning...

there is	hasn't	is not	I've
has not	there's	I have	isn't
what is	what's	I will	I'll

Choices, choices



• Select the punctuation to complete each sentence...

<p>What are we doing tomorrow</p> <p>Which punctuation mark is missing?</p> <p>Tick one.</p> <p>comma <input type="checkbox"/></p> <p>full stop <input type="checkbox"/></p> <p>question mark <input type="checkbox"/></p> <p>apostrophe <input type="checkbox"/></p>	<p>When it is finished, we can go</p> <p>Which punctuation mark is missing?</p> <p>Tick one.</p> <p>comma <input type="checkbox"/></p> <p>full stop <input type="checkbox"/></p> <p>question mark <input type="checkbox"/></p> <p>apostrophe <input type="checkbox"/></p>
---	---


Make it simpler...

<p>Tick where 'and' should go in the sentence.</p> <p>I have ham eggs.</p> <p><input type="checkbox"/> <input type="checkbox"/> <input type="checkbox"/></p>	<p>Add ? or ! to complete this sentence.</p> <p>This is hard</p>	<p>Add the prefix 'un' to this word to change the verb to its opposite.</p> <p>dress _____</p>
<p>Circle the words you think should have a capital letter.</p> <p>spain sun monday</p>	<p>Which tricky word has Mr Whoops been juggling with?</p> <p>h s a</p>	<p>Practise writing these tricky word spellings.</p> <p>like _____</p> <p>some _____</p> <p>come _____</p>

a

Unscramble this sentence.


You get slide. off must the



c


Tick the real words and cross the nonsense alien words.

quing	owls
beard	hair
nair	night
yighs	



e

Write the plural of this noun by adding the 's' or 'es' suffix to show there is more than one.

jet _____ 

bar _____


b

Use numbers 1-3 to order this short story. One is done for you.

Once upon a time there was a shark called Wendy.

The fish were so happy about it, they had a party for her!

This shark did not want to eat fish, so she ate sea grass.



d

Find the hidden words.

has	d	p	h	y	l	s
saw	s	u	a	o	i	n
the	t	l	s	a	w	h
put	z	l	a	r	e	p
pull	t	h	e	r	l	u
here	n	h	e	w	e	t

f

Oops Mr Whoops has made TWO mistakes in his sentence.

Can you change it?

that coat was in Canada on thursday.



😊 Knock-Knock...Who's there?


WHAT DID THE OCEAN SAY TO THE PIRATE?

Nothing, it just waved.

HOW DO YOU GET A SQUIRREL TO LIKE YOU?

Act like a nut.

Q: WHY DO FISH LIVE IN SALT WATER?



A: BECAUSE PEPPER MAKES THEM SNEEZE!

Knock knock.

Who's there?

Butter.

Butter who?

I butter tell you a few more knock-knock jokes.

Q: Why did the banana go to the doctor?

A: Because it was not peeling well.

