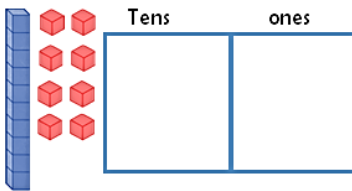
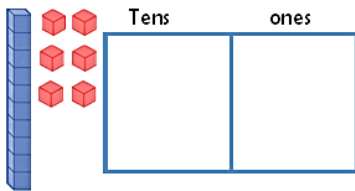
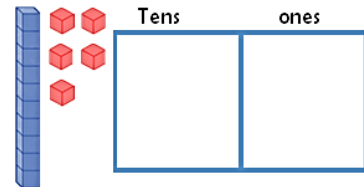
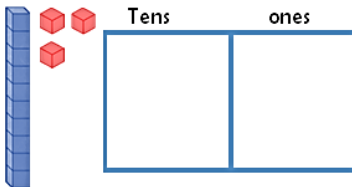
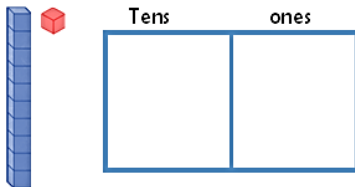
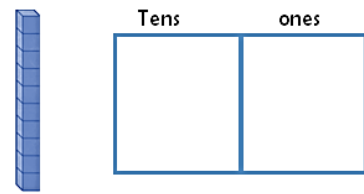
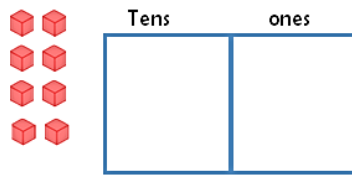
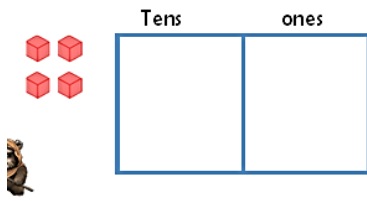


Place Value

Home learning 15/9/23

Which numbers have been represented by the tens and ones jottings?



Using your tens and ones jottings to represent each number:

6

9

10

14

17

22

38

45

53

64

71

Use the comparison signs $<$ $>$ $=$ to compare the pairs of numbers e.g $12 < 23$

15 ○ 26

36 ○ 42

17 ○ 17

52 ○ 10

100 ○ 100